








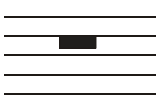




MAPPING 3 (Divided by a common language?)

Can you match the note names to the symbols?

One 'answer' for each set of terms is given as an example.

Modern Term	Symbols	Traditional Term
Half note		Quaver
Half rest		Semibreve
Quarter note		Semiquaver rest
Eighth rest		Minim rest
Whole note		Dotted crotchet
Eighth note		Semibreve rest
Whole rest		Quaver rest
Dotted eighth rest		Dotted quaver rest
Sixteenth note		Minim
Dotted quarter note		Crotchet rest
Sixteenth rest		Crotchet
Quarter rest		Semiquaver